

Skillment GK

PMP Planet
Multimedia Publishers
The Ultimate Resource

A Skill-based General Knowledge Book



FS-5
Class-2



Based on NCF for
Foundational Stage
2022 and NIPUN
BHARAT 2021



Multidisciplinary

Experiential Learning

Linked with SDGs

Art Integration

Artificial Intelligence

Worksheets

Worksheet

A. Match the things with their names.

1.



Forks

2.



Tissue Paper

3.



Aprons

4.



Spoons

B. Tick (✓) the correct answer.

1. People use an apron to do this activity.

a. Cooking

b. Playing

c. Teaching

2. Which shop sells milk, curd, and butter?

a. Bakery

b. Dairy

c. Cosmetic shop

3. Where do you go to buy dresses?

a. Toy shop

b. Grocery shop

c. Costume shop

4. From where do you buy biscuits, cakes and pastries?

a. Chemist Shop

b. Bakery

c. Dairy

C. List any five items that you like to buy for yourself.

1. _____

2. _____

3. _____

4. _____

5. _____

A. Tick (✓) the correct answer.

1. Which of the following is called the kitchen of a plant?

a. Seeds <input type="checkbox"/>	b. Roots <input type="checkbox"/>	c. Leaves <input type="checkbox"/>
-----------------------------------	-----------------------------------	------------------------------------
2. What is the baby of a lion called?

a. Foal <input type="checkbox"/>	b. Cub <input type="checkbox"/>	c. Calf <input type="checkbox"/>
----------------------------------	---------------------------------	----------------------------------
3. What is the baby of a kangaroo called?

a. Joey <input type="checkbox"/>	b. Foal <input type="checkbox"/>	c. Calf <input type="checkbox"/>
----------------------------------	----------------------------------	----------------------------------
4. Which of the following is the national animal of India?

a. Elephant <input type="checkbox"/>	b. Rhinoceros <input type="checkbox"/>	c. Tiger <input type="checkbox"/>
--------------------------------------	----------------------------------------	-----------------------------------
5. Which of the following is the tallest animal of the world?

a. Elephant <input type="checkbox"/>	b. Giraffe <input type="checkbox"/>	c. Crocodile <input type="checkbox"/>
--------------------------------------	-------------------------------------	---------------------------------------

B. Identify the leaves and complete the names of these plants.



P P L



C O N T



N M

C. Write 'T' for true and 'F' for false statements.

1. The baby of a cow is called a calf.
2. The baby of a hen is called a kitten.
3. A bear is fond of eating fish and honey.
4. A tiger feeds on plants.
5. A rhinoceros is a huge animal with one or two horns.
6. A giraffe is native to Asia.

A. Tick (✓) the correct answer.

1. Coronavirus causes this disease.

a. Bird Flu

b. COVID-19

c. Plague

2. Which one is a common symptom of COVID-19?

a. Fatigue

b. Fits

c. Loss of appetite

3. Which of these is not a common symptom of COVID-19?

a. Difficulty in breathing

b. Pale skin

c. Cough

4. Which one is an internal body part?

a. Stomach

b. Hand

c. Nose

5. Which of the following is not seen in the night sky?

a. Moon

b. Sun

c. Stars

B. Write 'T' for true and 'F' for false statements.

1. A virus is a very small germ.

2. Coronavirus is not dangerous.

3. The body parts you can see are called internal body parts.

4. The Sun is many times bigger than the Moon.

C. Identify and complete the names of the pictures.

1.



L V R

2.



H E T

3.




K D N Y

4.



A H

5.



J I R

6.



A R N

A. Match the dishes with the states they belong to.

- | | |
|---------------------|--------------|
| 1. Masor Tenga | a. Rajasthan |
| 2. Litti Chokha | b. Gujarat |
| 3. Dal-baati Churma | c. Assam |
| 4. Fafda Jalebi | d. Telangana |
| 5. Sarva Pindi | e. Bihar |


B. Write 'T' for true and 'F' for false statements.

1. Sarson ka Saag and Makki ki Roti belongs to Punjab.
2. The Golden Temple is located in Delhi.
3. The Taj Mahal is located in the city of Agra.
4. The Charminar is located in Bengaluru.
5. Rangoli and lights are associated with Diwali.



C. Identify and name the following.

1.



2.



3.



A. Tick (✓) the correct answer.

- Dal-Bati Churma is popular in this state

a. Tamil Nadu <input type="checkbox"/>	b. Assam <input type="checkbox"/>	c. Rajasthan <input type="checkbox"/>
----------------------------------------	-----------------------------------	---------------------------------------
- Which dish belongs to the Bihar state?

a. Uttapam <input type="checkbox"/>	b. Litti Chokha <input type="checkbox"/>	c. Fafda Jalebi <input type="checkbox"/>
-------------------------------------	------------------------------------------	------------------------------------------
- Which monument is made from white marble?



a. Hawa Mahal <input type="checkbox"/>	b. Gateway of India <input type="checkbox"/>	c. Taj Mahal <input type="checkbox"/>
----------------------------------------	----------------------------------------------	---------------------------------------
- We burn Ravana's effigy on this festival.

a. Diwali <input type="checkbox"/>	b. Dusshera <input type="checkbox"/>	c. Eid <input type="checkbox"/>
------------------------------------	--------------------------------------	---------------------------------
- From where do we buy dolls, teddies and garments?

a. Toy shop <input type="checkbox"/>	b. Grocery shop <input type="checkbox"/>	c. Costume shop <input type="checkbox"/>
--------------------------------------	------------------------------------------	------------------------------------------
- This huge animal has a long trunk and a pair of tusks.

a. Hippopotamus <input type="checkbox"/>	b. Elephant <input type="checkbox"/>	c. Bear <input type="checkbox"/>
------------------------------------------	--------------------------------------	----------------------------------

B. Identify and name the pictures.



C. Write 'T' for true and 'F' for false statements.

- The tiger is the most ferocious animal.
- Venus is the closest planet to the sun.
- Sarso Ka Saag and Makki Ki Roti is popular in Punjab.
- Festivals bring joy in our lives.

A. Write 'T' for true and 'F' for false statements.

1. Merlion is a monument located in Singapore.
2. The Opera House is a theatre building located in Moscow, Russia.
3. The Pyramid of Giza is located in Egypt.
4. Our Earth is divided into seven continents.
5. Mumbai is the capital of India.

B. Tick (✓) the correct answer.

1. Which monument is leaning to one side?

a. Qutub Minar <input type="checkbox"/>	b. Leaning Tower of Pisa <input type="checkbox"/>	c. Eiffel Tower <input type="checkbox"/>
-----------------------------------------	---------------------------------------------------	------------------------------------------
2. Which monument portrays a mythical creature?

a. Pyramid of Giza <input type="checkbox"/>	b. Opera House <input type="checkbox"/>	c. Merlion <input type="checkbox"/>
---------------------------------------------	-----------------------------------------	-------------------------------------
3. Dhaka is the capital of this country.

a. Bhutan <input type="checkbox"/>	b. Nepal <input type="checkbox"/>	c. Bangladesh <input type="checkbox"/>
------------------------------------	-----------------------------------	----------------------------------------
4. This is the capital of the United States.

a. Moscow <input type="checkbox"/>	b. Washington DC <input type="checkbox"/>	c. London <input type="checkbox"/>
------------------------------------	-------------------------------------------	------------------------------------

C. Identify and name the monuments.









A. Identify the indoor games and complete their names.



L D



C R M



C E S

B. Identify and name the cartoon characters.



C. Tick (✓) the correct answer.

1. Which of the following is an indoor game?

a. Cricket

b. Football

c. Monopoly

2. Which one is not an indoor game?

a. Golf

b. Snakes and ladders

c. Scrabble

3. What is the arena of boxing called?

a. Ring

b. Field

c. Pool

4. This is the place where baseball is played.

a. Pitch

b. Diamond

c. Count

A. Match and complete the ricochet words.

- | | |
|------------|------------|
| 1. Tick- | a. skelter |
| 2. Nitty- | b. top |
| 3. Tip- | c. gritty |
| 4. Criss- | d. tock |
| 5. Helter- | e. cross |

B. List any five ricochet words you have read or heard before.

- | | |
|----------|----------|
| 1. _____ | 2. _____ |
| 3. _____ | 4. _____ |
| 5. _____ | |


C. Look at the pictures and name the stories.



D. List any five stories you have read or heard before.

- | | |
|----------|----------|
| 1. _____ | 2. _____ |
| 3. _____ | 4. _____ |
| 5. _____ | |

A. Make changes in the shapes according to the pattern.



B. Fill in the missing numbers or letters in the following patterns.



C. Colour the circles red, triangles green, and stars yellow.



A. Write 'T' for true and 'F' for false statements.

1. Throwing waste is not good for the environment.
2. Reducing waste is good for the environment.
3. We cannot reduce waste materials.
4. First aid is the help given to an injured person by a doctor.
5. Timely given first aid can save the life of an injured person.

B. Tick (✓) in the box if you think the described item is waste.

1. A recently bought storybook that you like to read.
2. A plastic jug that has run out of water.
3. A milk bottle that has developed a crack.
4. Used aluminum foil.
5. Your toys that have broken.
6. Your school bag that is in good condition.
7. Old newspaper.
8. A deflated football.

C. You can see the following things in a first aid box. Identify and name them.

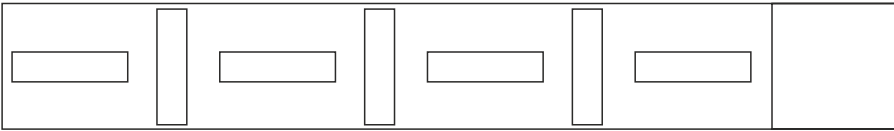


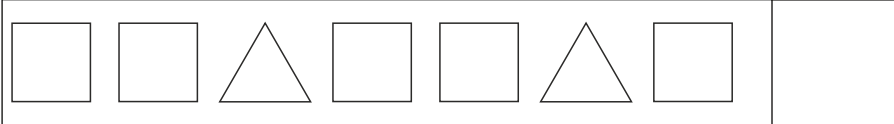






A. Draw the shapes that will come next.

1. 

2. 

B. Fill in the missing numbers and letters in the following.

1.

1	4	7		13	16		22
---	---	---	--	----	----	--	----


2.

4	8		16	20		28	
---	---	--	----	----	--	----	--

3.

L	N		R	T			
---	---	--	---	---	--	--	--

C. Circle all the triangles.



D. Write T for true and F for false statements.

1. Reducing waste is good for the environment.
2. Timely first aid can save the life of an injured person.
3. The Opera House is located in London, England.
4. The cartoon character Jerry is a cat.
5. 'Pitter' makes a ricochet word with 'patter'.
6. A rectangle is an open shape.



A. Tick (✓) the correct answer.

1. We can go to this place to read different types of books.

a. Post office

b. Library

c. Bank

2. We need to go to this place to board an aeroplane.

a. Railway station

b. Bus stop

c. Airport

3. We can buy envelopes and stamps from this place.

a. Police station

b. Post office

c. Bank

4. We can board a train at this place.

a. Railway station

b. Airport

c. Bus stop

5. We can deposit and keep our money safely here.

a. Police station

b. Library

c. Bank

B. Identify and complete the names of these places.

1.



P	L	C	
S		T	N

2.



F	R	
S		T I N

3.



B	S
S	O P

4.



L	B	A	Y
---	---	---	---

A. Tick (✓) the correct answer:

1. This is the most dangerous water animal.

a. Octopus

b. Dolphin

c. Shark

2. This water animal is the biggest animal in the world.

a. Shark

b. Blue whale

c. Hippopotamus

3. This tiny marine animal looks like a horse.

a. Seahorse

b. Octopus

c. Turtle

4. This is the home for a dog.

a. Pen

b. Stable

c. Kennel

5. A horse lives here.

a. Stable

b. Pen

c. Cave

6. A burrow is the home for this animal.

a. Bird

b. Rabbit

c. Dog

B. Identify and complete the names of these pictures.

1.



T	R	T		
---	---	---	--	--

2.



G		D	F	S	
---	--	---	---	---	--

3.



B	R	C		L	
---	---	---	--	---	--

4.



N		T
---	--	---

C. Write 'T' for true and 'F' for false statements.

1. A hippopotamus kills and eats other animals.

2. The dolphin is a playful animal.

3. Vegetables are very good for our health.

4. Sheep live in a stable.

A. Identify the pictures and complete their names.



D S R T



M U T I N



W B C M



P N D I E

B. Match the following.

- | | |
|------------|---------------------------------------------------|
| 1. Valley | a. Helps us to feel |
| 2. Plateau | b. Helps us to taste |
| 3. Speaker | c. A high piece of land with flat top |
| 4. Nose | d. Low land between two mountains or hills |
| 5. Tongue | e. Helps us to smell |
| 6. Skin | f. Used to listen to the sounds from the computer |

C. Write 'T' for true and 'F' for false statements.

- A mountain has a pointed top called peak.
- An ocean is the largest of all water bodies.
- Dal and Wular are examples of rivers.
- We use headphones to record our voice on the computer.
- Our ears help us to hear.



A Tick (✓) the correct answer.

- The Lotus Temple is located in this city.




a. Delhi	<input type="checkbox"/>	b. Kolkata	<input type="checkbox"/>	c. Mumbai	<input type="checkbox"/>
----------	--------------------------	------------	--------------------------	-----------	--------------------------
- In which city is the Jama Masjid located?

a. Hyderabad	<input type="checkbox"/>	b. Delhi	<input type="checkbox"/>	c. Amritsar	<input type="checkbox"/>
--------------	--------------------------	----------	--------------------------	-------------	--------------------------
- Which is the most important religious place of the Sikhs?

a. Anandpur Sahib	<input type="checkbox"/>	b. Damdama Sahib	<input type="checkbox"/>	c. Golden Temple	<input type="checkbox"/>
-------------------	--------------------------	------------------	--------------------------	------------------	--------------------------
- Which religious place of the Hindus is located near Katra in Jammu and Kashmir?

a. Akshardham	<input type="checkbox"/>	b. Vaishno Devi	<input type="checkbox"/>	c. Tirupati Balaji	<input type="checkbox"/>
---------------	--------------------------	-----------------	--------------------------	--------------------	--------------------------

B. Identify the following famous Indians and complete their names.

1.  <table border="1" style="width: 100%; text-align: center; border-collapse: collapse;"> <tr> <td>R</td><td>T</td><td>N</td> </tr> <tr> <td>T</td><td></td><td>A</td> </tr> </table>	R	T	N	T		A	2.  <table border="1" style="width: 100%; text-align: center; border-collapse: collapse;"> <tr> <td>K</td><td>I</td><td></td><td>S</td><td>H</td> </tr> <tr> <td>S</td><td></td><td>Y</td><td></td><td>T</td><td>H</td> </tr> </table>	K	I		S	H	S		Y		T	H	3.  <table border="1" style="width: 100%; text-align: center; border-collapse: collapse;"> <tr> <td>S</td><td>D</td><td>H</td> </tr> <tr> <td>M</td><td>R</td><td>Y</td> </tr> </table>	S	D	H	M	R	Y
R	T	N																							
T		A																							
K	I		S	H																					
S		Y		T	H																				
S	D	H																							
M	R	Y																							

C. Identify and name the following freedom fighters.

 <div style="border: 1px solid orange; height: 30px; width: 100%; margin-top: 10px;"></div>	 <div style="border: 1px solid orange; height: 30px; width: 100%; margin-top: 10px;"></div>	 <div style="border: 1px solid orange; height: 30px; width: 100%; margin-top: 10px;"></div>
-----------------------------------------------------------------------------------------------------------------------------------------------------------------------------------	------------------------------------------------------------------------------------------------------------------------------------------------------------------------------------	-------------------------------------------------------------------------------------------------------------------------------------------------------------------------------------

A. Tick (✓) the correct answer.

1. The Mahabodhi Temple is located in this state.

- a. Bihar b. Uttar Pradesh c. Madhya Pradesh

2. In which state is the Golden Temple located?

- a. Haryana b. Punjab c. Himachal Pradesh

3. Shikharji is a religious place for these people.

- a. Jains b. Parsis c. Buddhists

4. We wait for a bus at this place.

- a. Bus station b. Railway station c. Airport

5. This animal has a shell that protects it from attack by other animals.

- a. Octopus b. Dolphin c. Turtle

6. This water body is surrounded by land on all sides.

- a. River b. Ocean c. Lake

B. Identify and complete the names of pictures.

1.



C	P	I	C	M
---	---	---	---	---

2.



L	T	S
---	---	---

T	M		E
---	---	--	---

3.



G		D	N
---	--	---	---

T	M	L	
---	---	---	--

C. Identify and name these people.







A. Identify and name these traditional dresses of different countries.

1.



2.



3.



B. Match the following.

- | | |
|-----------|----------------|
| 1. Kimono | a. Mexico |
| 2. Huipil | b. Kuwait |
| 3. Hanbok | c. US |
| 4. Dollar | d. South Korea |
| 5. Dinar | e. Japan |

C. Tick (✓) the correct answer.

- Gho is the traditional dress of this country.

a. Japan	<input type="checkbox"/>	b. Bhutan	<input type="checkbox"/>	c. South Korea	<input type="checkbox"/>
----------	--------------------------	-----------	--------------------------	----------------	--------------------------
- Flamenco is a traditional dress of this country.

a. Scotland	<input type="checkbox"/>	b. Spain	<input type="checkbox"/>	c. Mexico	<input type="checkbox"/>
-------------	--------------------------	----------	--------------------------	-----------	--------------------------
- Kilt is a traditional dress of this country.

a. Scotland	<input type="checkbox"/>	b. Mexico	<input type="checkbox"/>	c. Spain	<input type="checkbox"/>
-------------	--------------------------	-----------	--------------------------	----------	--------------------------
- This is the currency of India.

a. Taka	<input type="checkbox"/>	b. Dinar	<input type="checkbox"/>	c. Rupee	<input type="checkbox"/>
---------	--------------------------	----------	--------------------------	----------	--------------------------
- This is the currency of the UK.

a. Pound Sterling	<input type="checkbox"/>	b. Dollar	<input type="checkbox"/>	c. Euro	<input type="checkbox"/>
-------------------	--------------------------	-----------	--------------------------	---------	--------------------------
- Ruble is the currency of this country.

a. Japan	<input type="checkbox"/>	b. France	<input type="checkbox"/>	c. Russia	<input type="checkbox"/>
----------	--------------------------	-----------	--------------------------	-----------	--------------------------

A. Identify and complete the names of these singers.



S U

N G M



S R E A

G O S A



A R J T

S N H

B. Identify and name these traditional sports.









C. Write 'T' for true and 'F' for false statements.

1. Ankit Tiwari is a famous cricketer.
2. Sunidhi Chauhan is a famous singer.
3. A kite is flown in the sky using thread and a spool.
4. In seven stones, the players use a ball and a pile of flat stones.
5. In kite flying, a string is used to spin the top.

A. Match the following to make compound words.

- | | |
|-----------|----------|
| 1. Rain | a. board |
| 2. Sun | b. bee |
| 3. Butter | c. bow |
| 4. Honey | d. light |
| 5. Key | e. fly |

B. Look at the pictures of animals. Write the sounds they make taking help from the help box.









Help Box

- Neigh
- Moo
- Bark
- Hiss

C. Tick (✓) the correct answer.

1. Which word can be added to 'light' to make a compound word?

a. fish

b. note

c. house

2. Which word will make a compound word when added to 'nail'?

a. book

b. cutter

c. eraser

3. Which word will make a compound word when added to 'air'?

a. port

b. conditioner

c. Both of these

4. An owl makes this sound.

a. Hoot

b. Hiss

c. Meow

5. Which animal trumpets?

a. Giraffe

b. Elephant

c. Cow

A. Find out and circle the odd figure.



B. Solve the riddles and write answers in the given spaces.

1. What begins with T, finishes with T, and has T in it?

2. You cut me, slice me, dice me, and all the while, you cry. What am I?

3. When I'm ripe, I'm green, when you eat me, I'm red, and when you spit me out, I'm black. What am I?

4. What becomes wetter the more it dries?

5. What is full of holes but still holds water?

A. Write 'T' for true and 'F' for false statements.

1. Intelligence means learning, thinking and taking decisions.
2. A person needs to think quickly to become intelligent.
3. There are intelligent machines that use natural intelligence.
4. The footpath is the safe place for walking.
5. We should cross the road at the zebra crossing.

**B. Read the clues and guess the food items.**

1. It is usually eaten peeled.
It can be boiled, fried or roasted.
People need it to make French fries.
2. It is usually sweet and brown.
It melts in your fingers.
It is made from cocoa beans, milk, and sugar.
3. It is red or bright orange in colour.
It can be eaten cooked or raw.
Rabbits seem to love it.

C. Fill in the blanks.

1. The zebra crossing is marked with _____ and _____ lines.
2. The traffic light has _____ lights.
3. The _____ light says STOP.
4. The _____ light says WAIT.
5. The _____ light says GO.

A. Solve the following riddles and write the answers in the given spaces.

1. When I'm ripe, I'm green. When you eat me, I'm red, and when you spit me out, I'm black. What am I? _____
2. What has hands but doesn't clap? _____
3. What has legs but cannot walk? _____
4. What grows if you feed it but dies if you give it water? _____

B. Read the given clues and guess the vehicle.

- This vehicle does not fly.
- It is not suitable for travel by water.
- It is not a large vehicle.
- It has just two wheels.
- It is very light-weight.
- You can ride it by moving your legs.

Name of the vehicle:

C. Tick (✓) the correct answer.

1. This place on road is marked with black and white lines.

a. Footpath <input type="checkbox"/>	b. Zebra crossing <input type="checkbox"/>	c. Foot-over bridge <input type="checkbox"/>
--------------------------------------	--------------------------------------------	----------------------------------------------
2. A traffic light has three lights. Which light says 'WAIT'?

a. Red <input type="checkbox"/>	b. Yellow <input type="checkbox"/>	c. Green <input type="checkbox"/>
---------------------------------	------------------------------------	-----------------------------------
3. Which of the following is the currency of Iran?

a. Rial <input type="checkbox"/>	b. Dinar <input type="checkbox"/>	c. Baht <input type="checkbox"/>
----------------------------------	-----------------------------------	----------------------------------
4. Which traditional sport is played with small glass balls?

a. Hopscotch <input type="checkbox"/>	b. Marbles <input type="checkbox"/>	c. Seven stones <input type="checkbox"/>
---------------------------------------	-------------------------------------	------------------------------------------
5. Which animal roars?

a. Elephant <input type="checkbox"/>	b. Cat <input type="checkbox"/>	c. Lion <input type="checkbox"/>
--------------------------------------	---------------------------------	----------------------------------